

Year 1


Mass and Capacity

Weight and mass are measured using different types of scales.



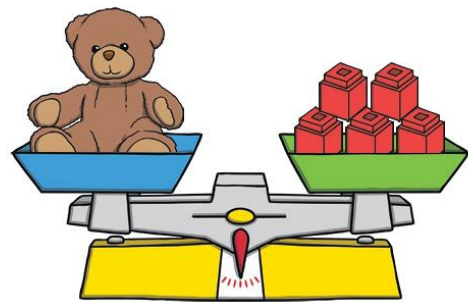
Compare Mass

The duck is **heavier** than the ball.
The ball is **lighter** than the duck.



Measure Mass

The teddy **weighs** the same as 5 cubes.
They are **balanced**.

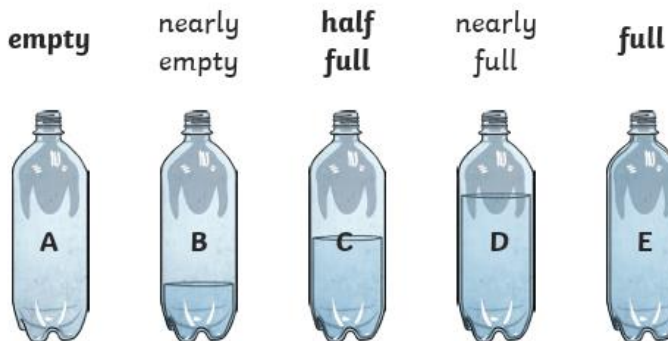


Capacity is the total amount of liquid a container can hold.

Volume is the amount of liquid that is in the container. This can vary.



Compare Capacity



B has **more** water than A.
D has **less** water than E.

Measure Capacity

It takes 4 cups to **fill** this jug.

